

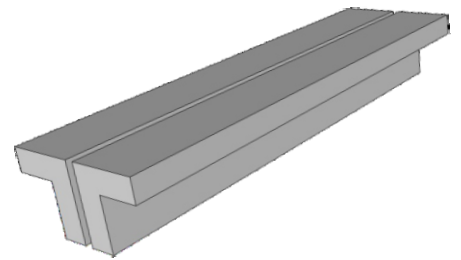
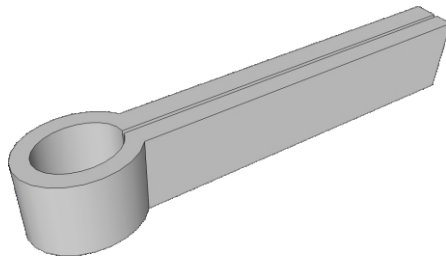
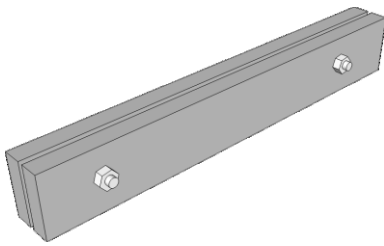
EXAMINATION QUESTIONS - FOLDING BARS

HELPFUL LINKS:

http://www.technologystudent.com/equip_fish/foldingbars1.html

1. What is the purpose of folding bars ? **3 marks**

2. Name the three types of folding bars shown below. **3 marks**



3. A small piece of sheet copper (shown opposite), has been folded to 90 degrees, using folding bars. In the space below and on the back of this sheet / second sheet, explain the process, from marking out to folding. Include both notes and sketches. **8 marks**

