

# THIRD ANGLE ORTHOGRAPHIC PROJECTION

V.Ryan © 2000 - 2008

On behalf of The World Association of Technology Teachers

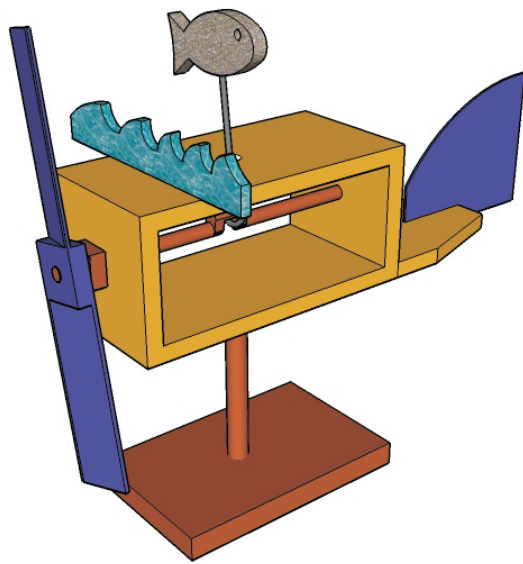
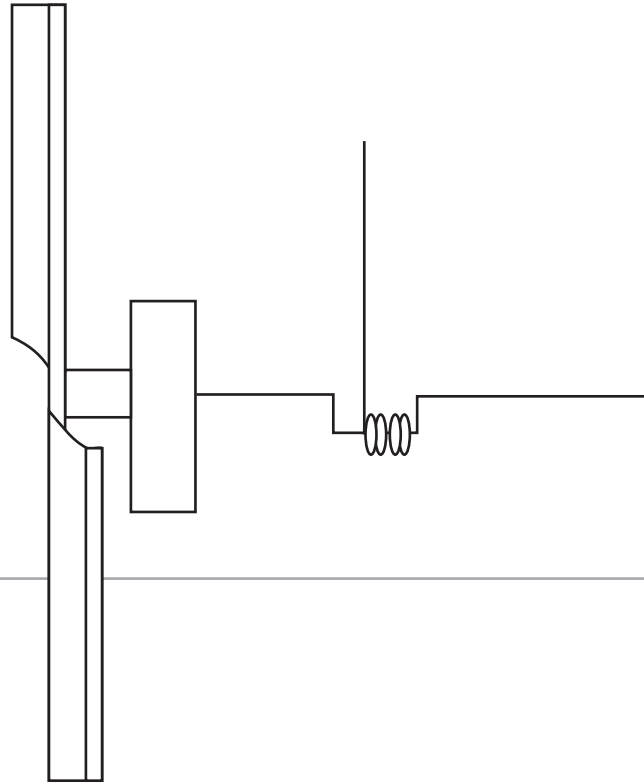

## W.A.T.T.



World Association of Technology Teachers

The 'Orthographic Projection Exercise' can be printed and used by teachers and students. It is recommended that you view the website section 'Graphics' ([www.technologystudent.com](http://www.technologystudent.com)) before attempting the design sheet .

THESE MATERIALS CAN BE PRINTED AND USED BY TEACHERS AND  
STUDENTS.  
THEY MUST NOT BE EDITED IN ANY WAY OR PLACED ON ANY OTHER  
MEDIA INCLUDING WEB SITES AND INTRANETS.  
NOT FOR COMMERCIAL USE.  
THIS WORK IS PROTECTED BY COPYRIGHT LAW.  
IT IS ILLEGAL TO DISPLAY THIS WORK ON ANY WEBSITE/MEDIA  
STORAGE OTHER THAN [www.technologystudent.com](http://www.technologystudent.com)



SCALE 1:2



THIRD ANGLE PROJECTION

Part of a working drawing has been started on this sheet. Complete an accurate working drawing of the wind powered device. This will consist of a front and a side view. No need to include a plan view.

The 3D image of the wind powered object is seen opposite.

NAME:

WORKING DRAWING

DATE: