


# ORTHOGRAPHIC DRAWING

V.Ryan © 2000 - 2010

On behalf of The World Association of Technology Teachers

## W.A.T.T.



World Association of Technology Teachers

This exercise can be printed and used by teachers and students. It is recommended that you view the website ([www.technologystudent.com](http://www.technologystudent.com)) before attempting the design sheet .

THESE MATERIALS CAN BE PRINTED AND USED BY TEACHERS AND STUDENTS.  
THEY MUST NOT BE EDITED IN ANY WAY OR PLACED ON ANY OTHER MEDIA INCLUDING WEB SITES AND INTRANETS.  
NOT FOR COMMERCIAL USE.  
THIS WORK IS PROTECTED BY COPYRIGHT LAW.  
IT IS ILLEGAL TO DISPLAY THIS WORK ON ANY WEBSITE/MEDIA STORAGE OTHER THAN [www.technologystudent.com](http://www.technologystudent.com)

# ORTHOGRAPHIC DRAWING EXERCISE

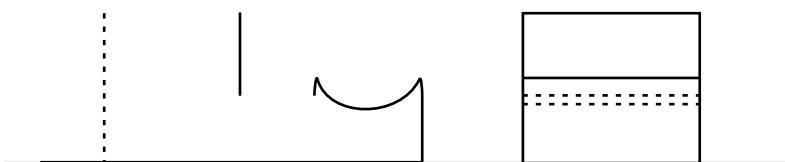
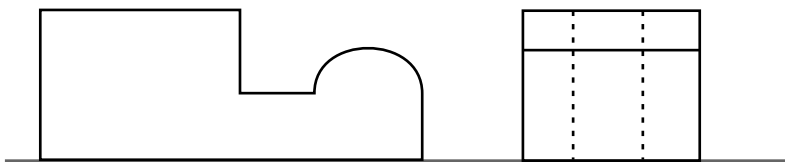
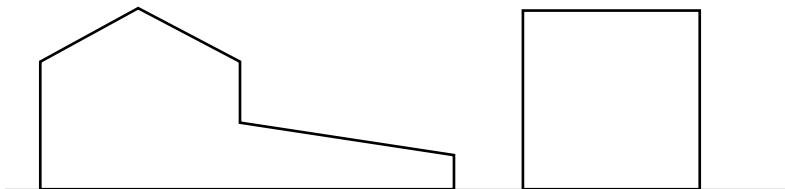
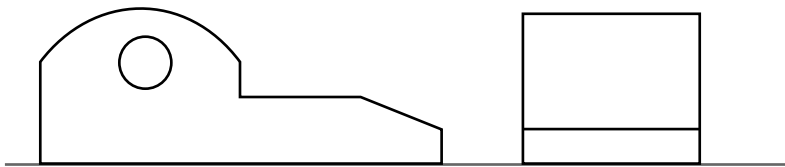
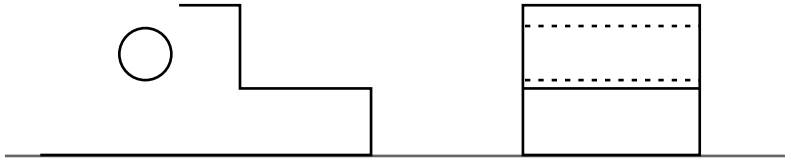
## USEFUL LINKS

<http://www.technologystudent.com/designpro/orthogrp1.html>

V.Ryan © 2010 World Association of Technology Teachers

Complete the orthographic drawings of the 3D objects by drawing the missing lines. Remember that hidden detail is represented by a dotted line. The arrow 'X' indicates the front view. Arrow 'Y' indicates the side view.

FRONT AND SIDE VIEW



3D DRAWING

