

# THIRD ANGLE ORTHOGRAPHIC DRAWING

**HELPFUL LINKS:**

[https://technologystudent.com/despro\\_f1sh/third7.html](https://technologystudent.com/despro_f1sh/third7.html)

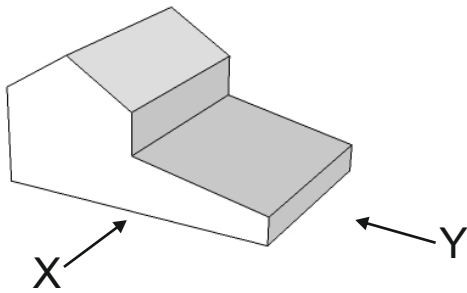
HELPFUL LINK




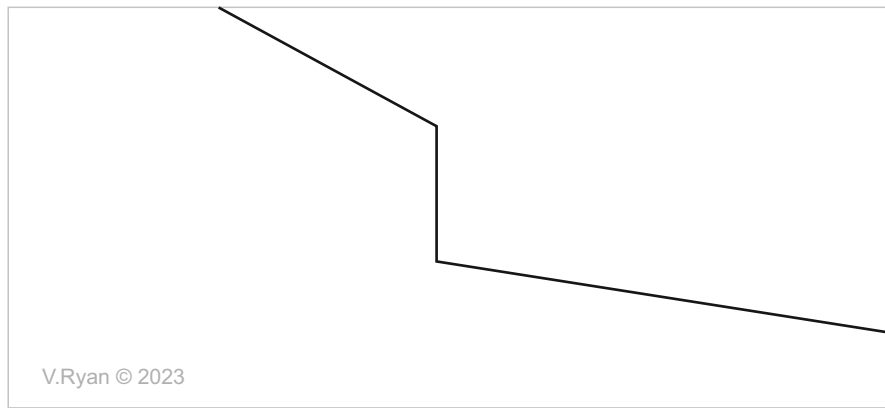
Complete the orthographic drawings of the 3D objects by adding the missing lines. Remember that hidden detail is represented by a dotted line. The arrow 'X' indicates the front view. Arrow 'Y' indicates the side view. Add six dimensions. (Use a ruler to measure from the completed views)

## PLAN VIEW

### 3D DRAWING



**PLEASE ESTIMATE  
ALL MEASUREMENTS**



## FRONT VIEW

## SIDE VIEW