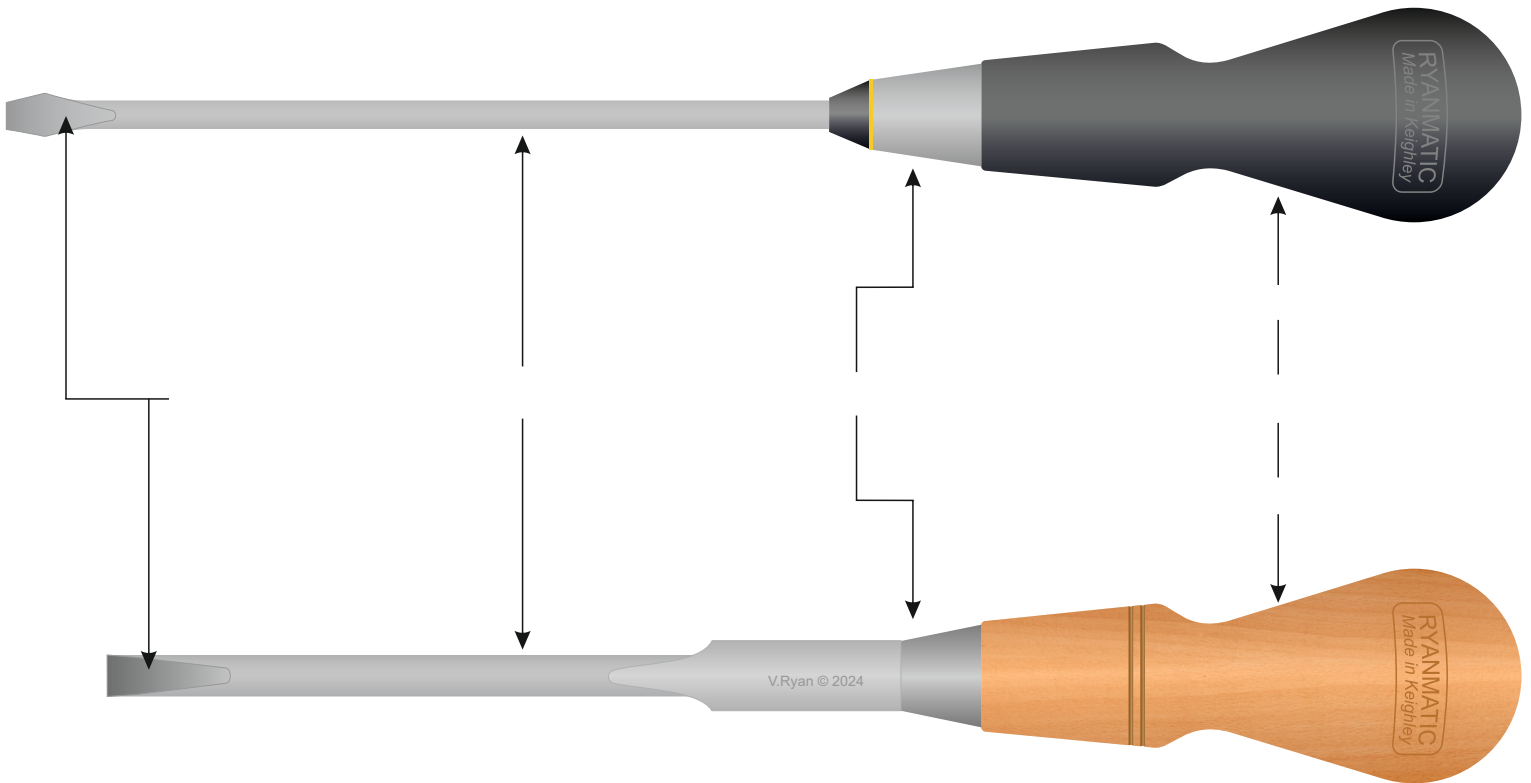


# SCREWDRIVERS - EXAMINATION QUESTIONS

**HELPFUL LINK:** [https://www.technologystudent.com/equip\\_flsh/scrwdrv1.html](https://www.technologystudent.com/equip_flsh/scrwdrv1.html)

1. Complete the diagram of the cabinet screwdrivers by adding the missing labels, as identified by the arrows. **6 marks**



2. When would you use an Engineer's Screwdriver? **3 marks**

---

---

---

---

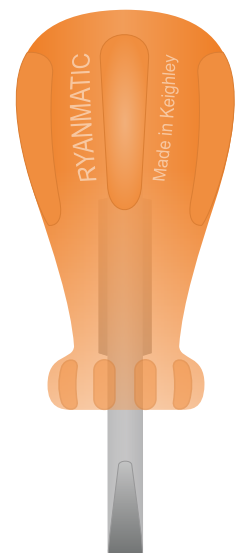
3. Name the screwdriver shown opposite? Why is it so useful? **3 marks**

---

---

---

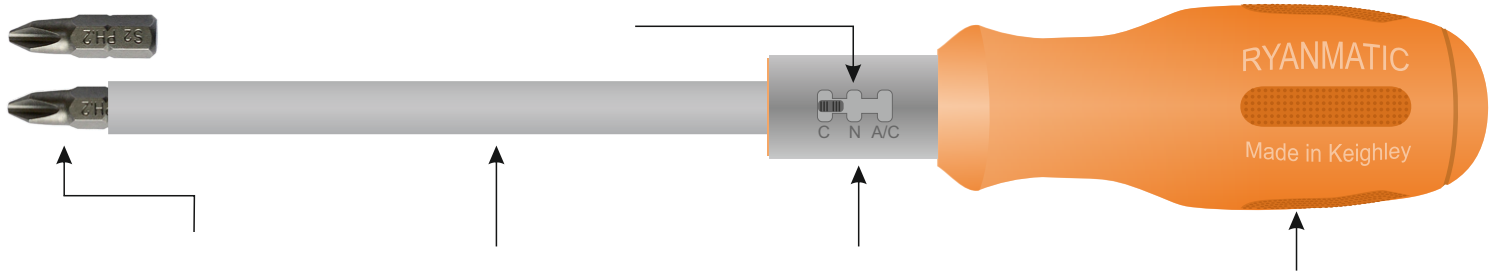
---



# SCREWDRIVERS - EXAMINATION QUESTIONS

**HELPFUL LINK:** [https://www.technologystudent.com/equip\\_flsh/scrwdrv1.html](https://www.technologystudent.com/equip_flsh/scrwdrv1.html)

4. Complete the diagram of the ratchet screwdriver by adding the missing labels, as identified by the arrows. **5 marks**



5. How does a Spiral Ratchet Screwdriver work? **3 marks**

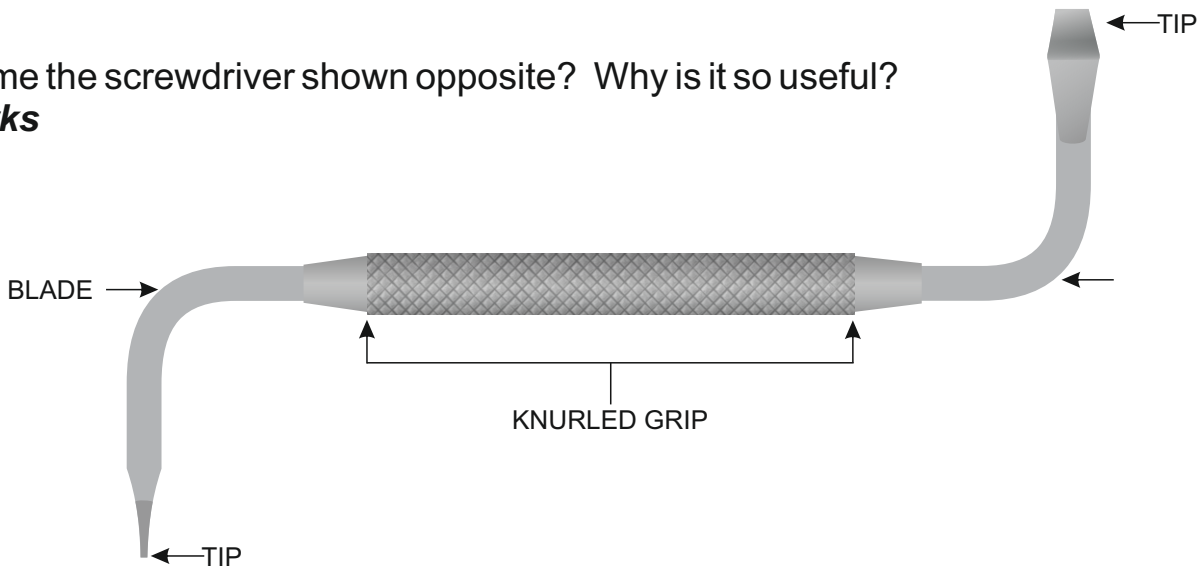
---

---

---

---

6. Name the screwdriver shown opposite? Why is it so useful? **3 marks**



---

---

---

---