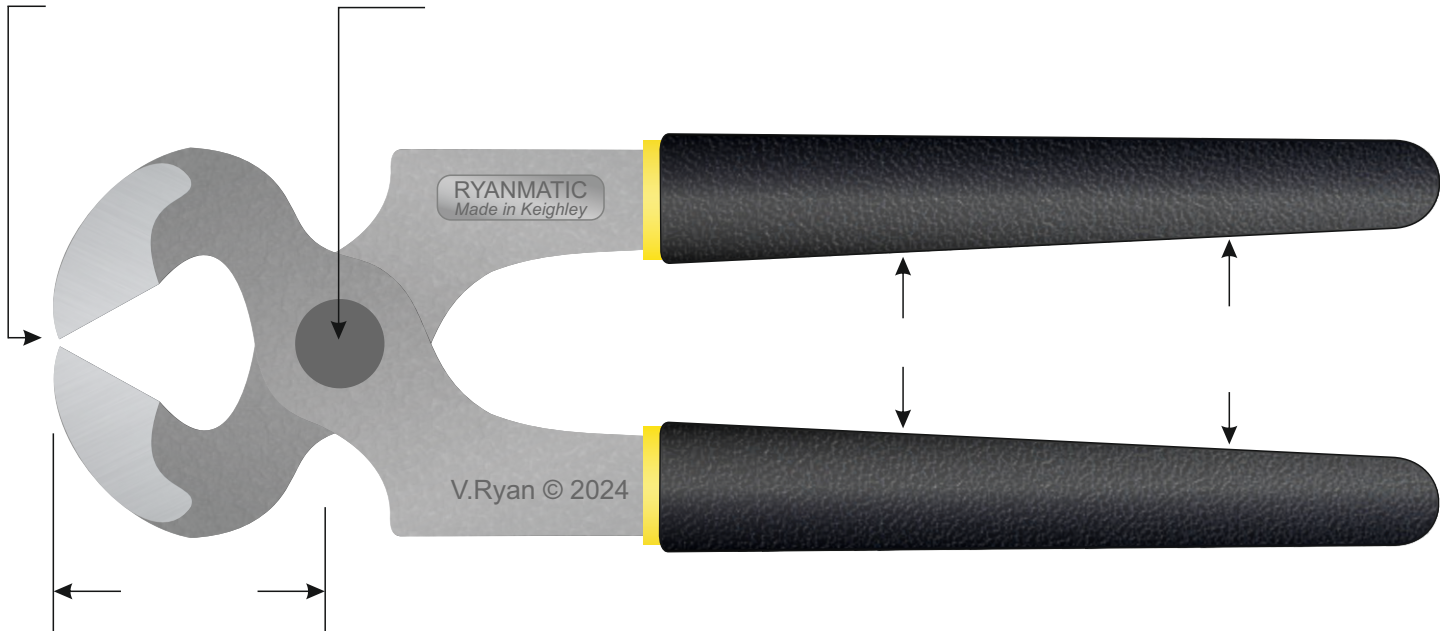


# CARPENTER'S PINCERS - EXAMINATION QUESTIONS

WORLD ASSOCIATION OF TECHNOLOGY TEACHERS <https://www.facebook.com/groups/254963448192823/> [www.technologystudent.com](http://www.technologystudent.com) © 2024 V.Ryan © 2024

**HELPFUL LINK:** [https://www.technologystudent.com/equip\\_fish/pincer1.html](https://www.technologystudent.com/equip_fish/pincer1.html)

**1. Complete the diagram of the pincers by adding the labels as indicated by the arrows. 5 marks**



**2. Write a description of a pair of carpenter's pincers. 4 marks**

---

---

---

---

---

---

**3. Describe one use of a pincer. Include reference to mechanical advantage / class one lever. Include a labelled diagram / sketch to support your answer. 4 marks**

---

---

---

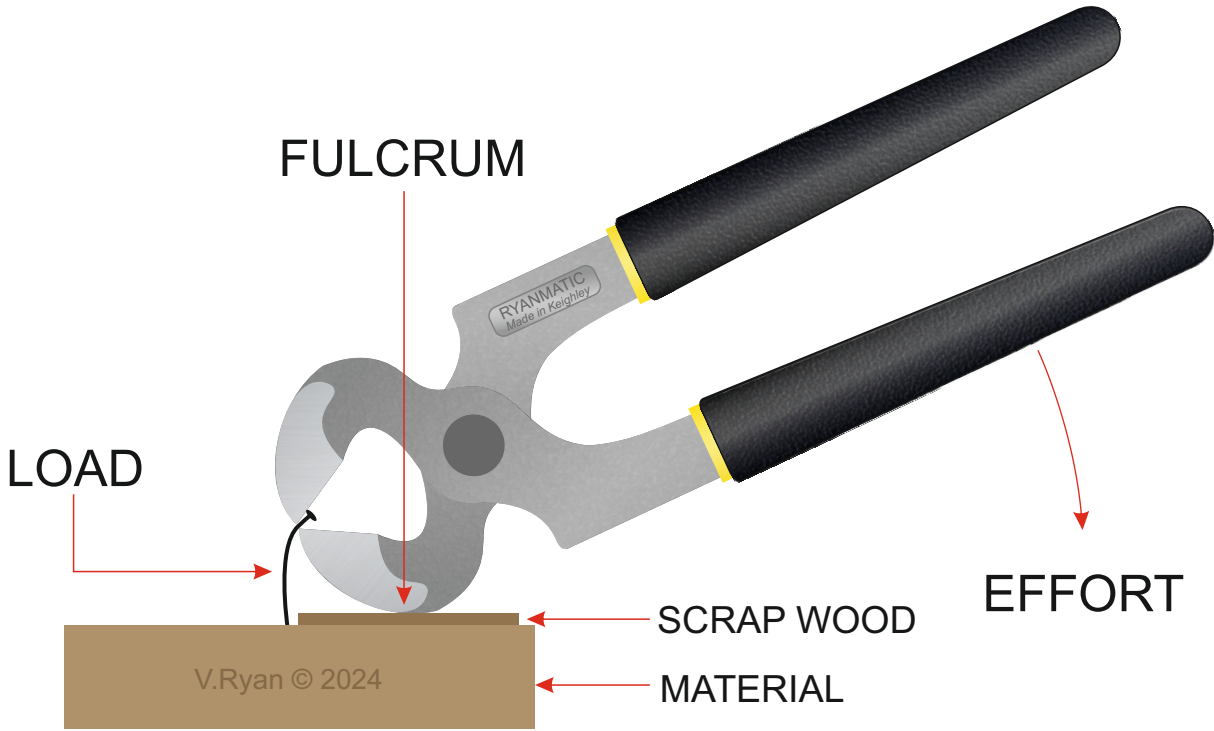
---

---

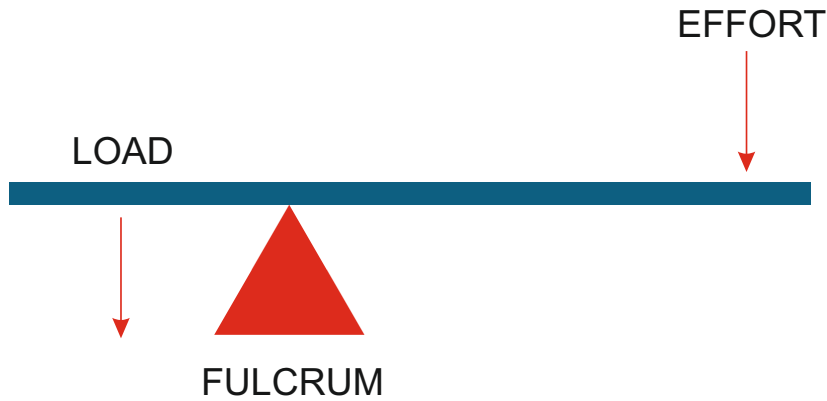
# CARPENTER'S PINCERS - EXAMINATION QUESTIONS

**HELPFUL LINK:** [https://www.technologystudent.com/equip\\_flash/pincer1.html](https://www.technologystudent.com/equip_flash/pincer1.html)

4. Using the diagram below for reference, why is a pincer regarded as a class one lever?  
**3 marks**



CLASS ONE LEVER



---

---

---

---

---

---